

Telling time



What time is shown by these clocks?





28 minutes to 7



14 minutes past 3

What time is shown by these clocks?



Telling time



What time is shown by these clocks?



28 minutes to 7



14 minutes past 3

What time is shown by these clocks?




13 minutes to 8



10 past 4



8 minutes to 6



twenty-six minutes past 6



12 minutes to 10



6 minutes to 11



24 minutes to 2



8 minutes past 12

Because of the popularity of digital watches, children could write 7:47 for the first answer and be correct, although the convention is to say the minutes to an hour or past an hour. Children should know both ways of saying the time.