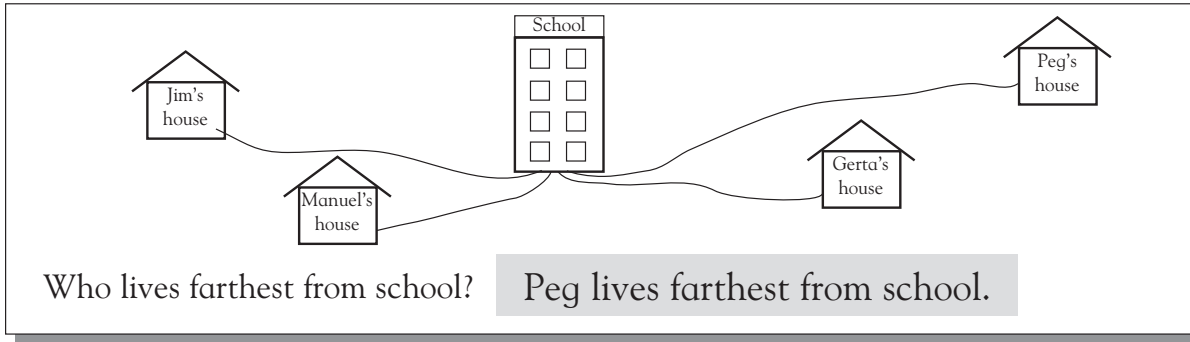
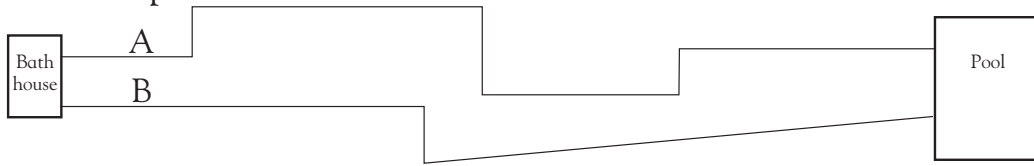




Length

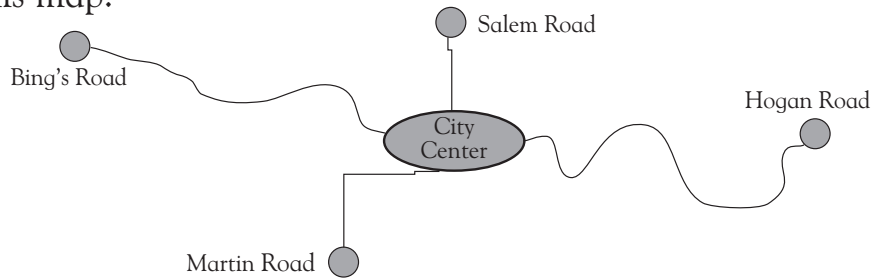


Look at this map.



Which route between the bath house and the pool is shorter, A or B?

Look at this map.



Is the Bing's Road to City Center longer or shorter than the Martin Road?

Which road to City Center is longest?

Which road to City Center is shorter than the Martin Road?

Look at this picture.

Lucy



Kenny



Marta



Tim



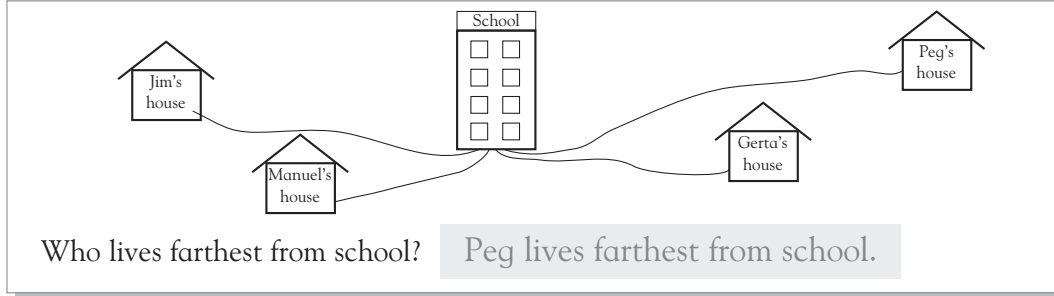
Whose ribbon is longest?

Whose ribbon is shorter than Tim's ribbon?

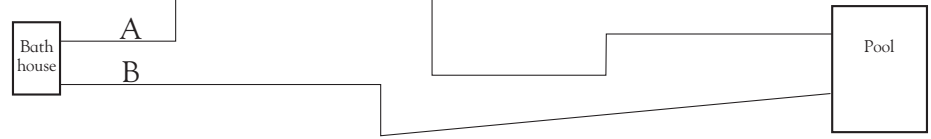
Whose ribbon is about the same length as Tim's ribbon?



Length

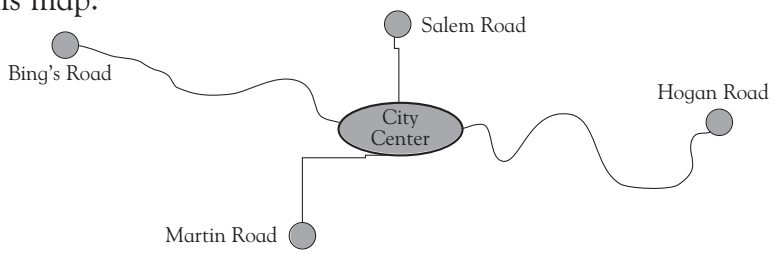


Look at this map.



Which route between the bath house and the pool is shorter, A or B? **B**

Look at this map.

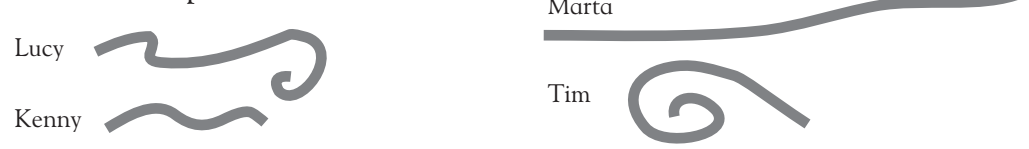


Is the Bing's Road to City Center longer or shorter than the Martin Road? **longer**

Which road to City Center is longest? **Hogan Road**

Which road to City Center is shorter than the Martin Road? **Salem Road**

Look at this picture.



Whose ribbon is longest? **Marta's**

Whose ribbon is shorter than Tim's ribbon? **Kenny's**

Whose ribbon is about the same length as Tim's ribbon? **Lucy's**

If children have difficulty visualizing lengths, have them use a ruler or a piece of string for making comparisons.