













Making 10











Color some fish green, and write the correct numbers in the boxes.







 green white
 + = 10



 green white
 + = 10



 green white
 + = 10



 green white
 + = 10



 green white
 + = 10



 green white
 + = 10

Write the missing numbers in the boxes to make 10.

$10 + \boxed{0} = 10$

$6 + \boxed{} = 10$

$2 + \boxed{} = 10$

$9 + \boxed{} = 10$

$5 + \boxed{} = 10$

$1 + \boxed{} = 10$

$8 + \boxed{} = 10$

$4 + \boxed{} = 10$

$0 + \boxed{} = 10$

$7 + \boxed{} = 10$

$3 + \boxed{} = 10$

Making 10



Color some fish green, and write the correct numbers in the boxes.

4 green 6 white
4 + 6 = 10

7 green 3 white
7 + 3 = 10

9 green 1 white
9 + 1 = 10

2 green 8 white
2 + 8 = 10

3 green 7 white
3 + 7 = 10

10 green 0 white
10 + 0 = 10

Write the missing numbers in the boxes to make 10.

10 + <input type="text" value="0"/> = 10	6 + <input type="text" value="4"/> = 10	2 + <input type="text" value="8"/> = 10
9 + <input type="text" value="1"/> = 10	5 + <input type="text" value="5"/> = 10	1 + <input type="text" value="9"/> = 10
8 + <input type="text" value="2"/> = 10	4 + <input type="text" value="6"/> = 10	0 + <input type="text" value="10"/> = 10
7 + <input type="text" value="3"/> = 10	3 + <input type="text" value="7"/> = 10	

The number of items shaded and the number of items unshaded must match the numbers written in the answer boxes. For the bottom activity, find out whether children have noticed the pattern as it develops.