


Sorting 3-dimensional shapes




Look at these shapes.

Which shape has corners? **prism**



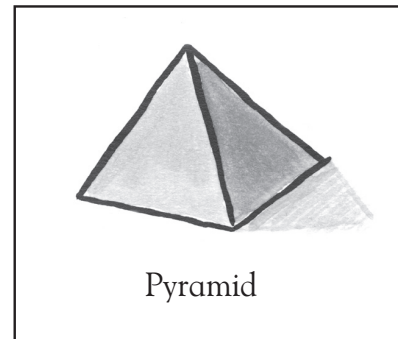
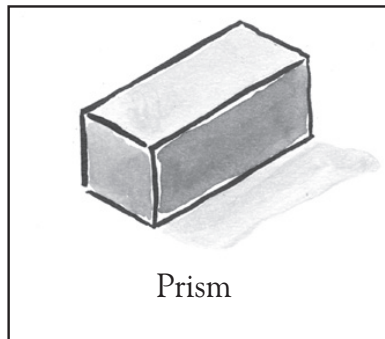
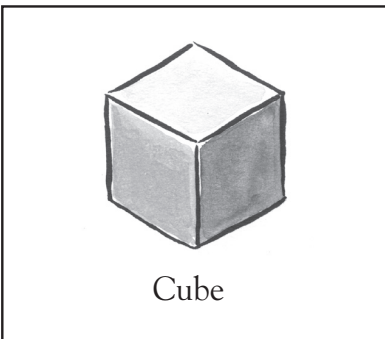
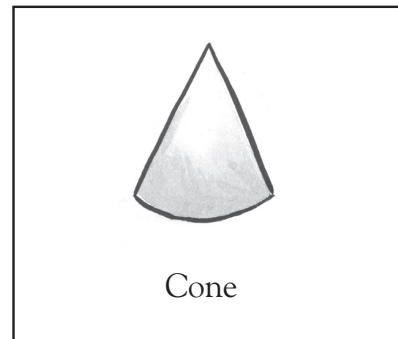

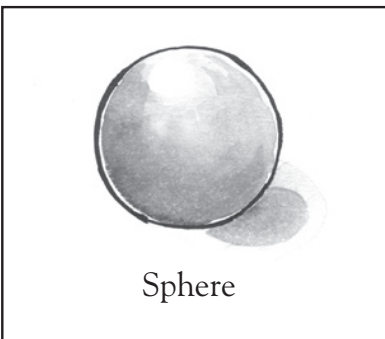
Sphere



Prism

Which shape has no corners? **sphere**

Look at these shapes.



Now complete this table by writing the name of each shape in the correct box.


Shapes that have corners	Shapes that have no corners

Sorting 3-dimensional shapes




Look at these shapes.

Which shape has corners?




Sphere



Prism

Which shape has no corners?

Look at these shapes.




Sphere




Cylinder




Cone



Cube



Prism



Pyramid

Now complete this table by writing the name of each shape in the correct box.

Shapes that have corners	Shapes that have no corners
Prism Pyramid Cube	Sphere Cylinder Cone

If necessary, point out that a shape must have flat surfaces to have corners.