



# Adding with different numbers of digits

Find the total for each problem.

$$\begin{array}{r} 432 \\ + 43 \\ \hline 475 \end{array}$$

$$\begin{array}{r} 11 \\ 176 \\ + 97 \\ \hline 273 \end{array}$$

Remember to regroup if you need to.

Find the total for each problem.

$$\begin{array}{r} 148 \\ + 31 \\ \hline \end{array}$$

$$\begin{array}{r} 271 \\ + 17 \\ \hline \end{array}$$

$$\begin{array}{r} 371 \\ + 24 \\ \hline \end{array}$$


$$\begin{array}{r} 938 \\ + 31 \\ \hline \end{array}$$

$$\begin{array}{r} 942 \\ + 26 \\ \hline \end{array}$$

$$\begin{array}{r} 747 \\ + 34 \\ \hline \end{array}$$

$$\begin{array}{r} 633 \\ + 43 \\ \hline \end{array}$$

$$\begin{array}{r} 101 \\ + 75 \\ \hline \end{array}$$



Write the answer in the box.

$47 + 320 = \square$

$26 + 251 = \square$

$273 + 97 = \square$

$849 + 38 = \square$

Write in the missing numbers in these problems.

$$\begin{array}{r} 242 \\ + 27 \\ \hline 2\square9 \end{array}$$

$$\begin{array}{r} 93\square \\ + 38 \\ \hline 977 \end{array}$$

$$\begin{array}{r} 8\square5 \\ + 12 \\ \hline 837 \end{array}$$


$$\begin{array}{r} 6\square4 \\ + 63 \\ \hline 687 \end{array}$$

Find the answer to these problems. Use the space for working them out.

Tommy has saved \$238. For his birthday he is given another \$52. How much does he have now?



A circus sells 208 adult tickets and 86 children's tickets. How many tickets are sold altogether?





# Adding with different numbers of digits

Find the total for each problem.

$$\begin{array}{r} 432 \\ + 43 \\ \hline 475 \end{array}$$

$$\begin{array}{r} 11 \\ 176 \\ + 97 \\ \hline 273 \end{array}$$

Remember to regroup if you need to.

Find the total for each problem.

$$\begin{array}{r} 148 \\ + 31 \\ \hline 179 \end{array}$$

$$\begin{array}{r} 271 \\ + 17 \\ \hline 288 \end{array}$$

$$\begin{array}{r} 371 \\ + 24 \\ \hline 395 \end{array}$$


$$\begin{array}{r} 938 \\ + 31 \\ \hline 969 \end{array}$$

$$\begin{array}{r} 942 \\ + 26 \\ \hline 968 \end{array}$$

$$\begin{array}{r} 747 \\ + 34 \\ \hline 781 \end{array}$$

$$\begin{array}{r} 633 \\ + 43 \\ \hline 676 \end{array}$$

$$\begin{array}{r} 101 \\ + 75 \\ \hline 176 \end{array}$$



Write the answer in the box.

$47 + 320 = 367$

$26 + 251 = 277$

$273 + 97 = 370$

$849 + 38 = 887$

Write in the missing numbers in these problems.

$$\begin{array}{r} 242 \\ + 27 \\ \hline 269 \end{array}$$

$$\begin{array}{r} 939 \\ + 38 \\ \hline 977 \end{array}$$

$$\begin{array}{r} 825 \\ + 12 \\ \hline 837 \end{array}$$

$$\begin{array}{r} 624 \\ + 63 \\ \hline 687 \end{array}$$

Find the answer to these problems. Use the space for working them out.

Tommy has saved \$238. For his birthday he is given another \$52. How much does he have now?

$$\begin{array}{r} 238 \\ + 52 \\ \hline 290 \end{array}$$

\$290



A circus sells 208 adult tickets and 86 children's tickets. How many tickets are sold altogether?

$$\begin{array}{r} 208 \\ + 86 \\ \hline 294 \end{array}$$

294



This page is straightforward. Any errors will probably be due to a failure to carry, or particularly in the second section, may occur where children have added digits with different place values.