




Telling time







What time is shown on the clock?

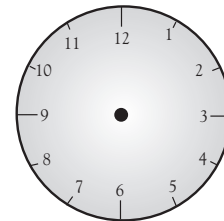
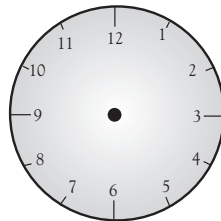
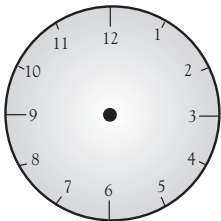
twenty after seven

7:20

What time is shown on each clock?



Draw the hands on each clock face to show the time.





twenty-five after seven

ten after four


quarter to five

Write each of these times on the digital watch faces.





Telling time




What time is shown on the clock?

twenty after seven


7:20

What time is shown on each clock?




ten after three

3:10




twenty-five after six

6:25



twenty-five to two


1:35




five after eight

8:05


Draw the hands on each clock face to show the time.



twenty-five after seven



ten after four




quarter to five


Write each of these times on the digital watch faces.



9:50



8:20



5:35

Children may need help with some of these exercises. Show them that they can count by 5s (in minutes) for each division on the clock face.