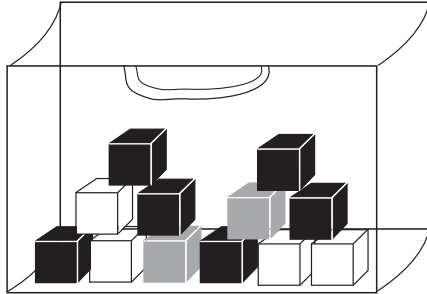


# Most and least likely



What are you most likely to pick out of each bag? Circle the answer.




a black cube

a gray cube

a white cube

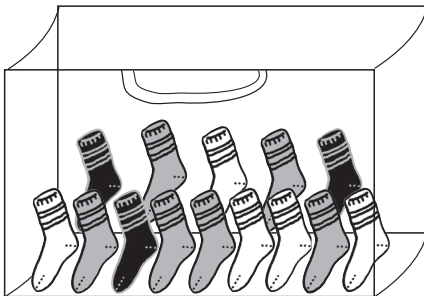
What are you least likely to pick out of each bag? Circle the answer.



a black tea cup

a gray tea cup

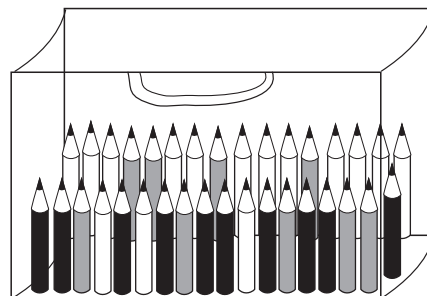
a white tea cup



a black sock

a gray sock

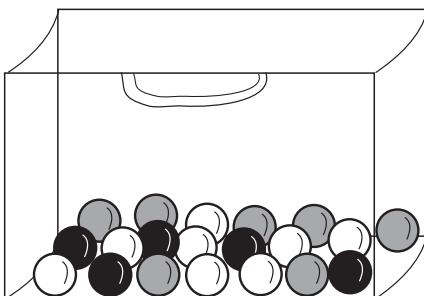
a white sock



a black pencil

a gray pencil

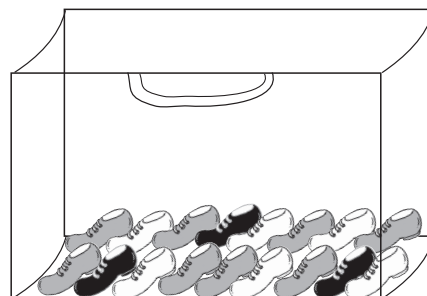
a white pencil



a black marble

a gray marble

a white marble



a black boot

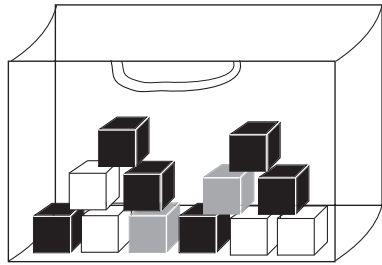
a gray boot

a white boot

# Most and least likely




What are you most likely to pick out of each bag? Circle the answer.




- a black cube
- a gray cube
- a white cube

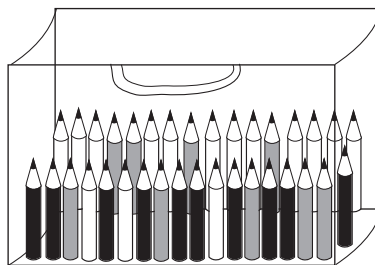
What are you least likely to pick out of each bag? Circle the answer.



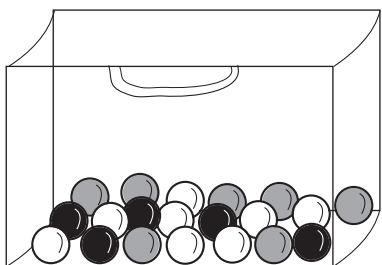
- a black tea cup
- a gray tea cup
- a white tea cup



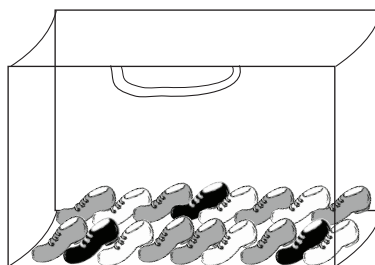
- a black sock
- a gray sock
- a white sock



- a black pencil
- a gray pencil
- a white pencil



- a black marble
- a gray marble
- a white marble



- a black boot
- a gray boot
- a white boot

Children should understand that the most likely item is the item of which there are the most and that the least likely item is the item of which there are the fewest.