



Perimeter of shapes

Find the perimeter of this rectangle.

To find the perimeter of a rectangle or square, we add the two lengths and the two widths together.




12.4 in.

27.3 in.

$$\begin{array}{r}
 11 \\
 27.3 \text{ in.} \\
 27.3 \text{ in.} \\
 12.4 \text{ in.} \\
 + 12.4 \text{ in.} \\
 \hline
 79.4 \text{ in.}
 \end{array}$$

79.4 in.

Find the perimeter of these rectangles and squares.
You may need to do your work on a separate sheet.



64.7 ft

64.7 ft

ft



20.4 ft

20.4 ft

ft



29.8 ft

47.2 ft

ft



36.8 ft

22.9 ft


ft



37.2 ft

37.2 ft

ft



47.8 ft

93.2 ft


ft



50.5 ft

50.5 ft

ft



37.9 ft

65.2 ft

ft



96.3 ft

24.8 ft

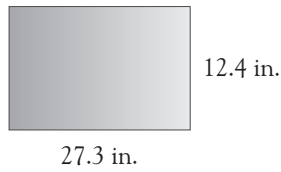
ft



Perimeter of shapes

Find the perimeter of this rectangle.

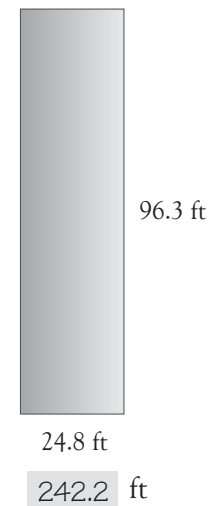
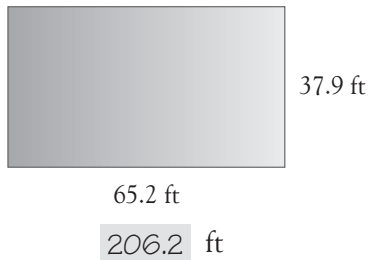
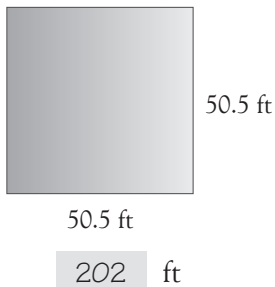
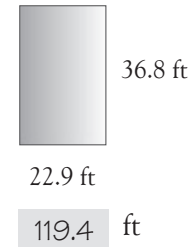
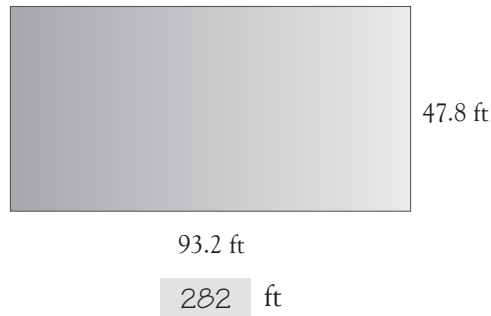
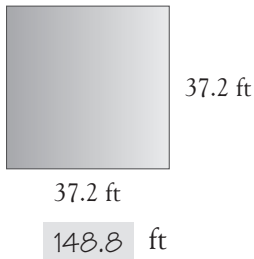
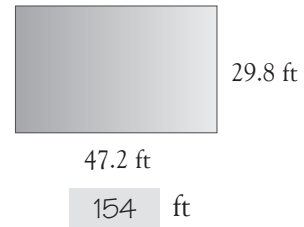
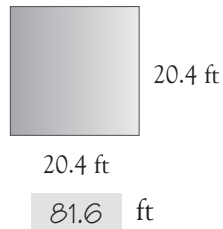
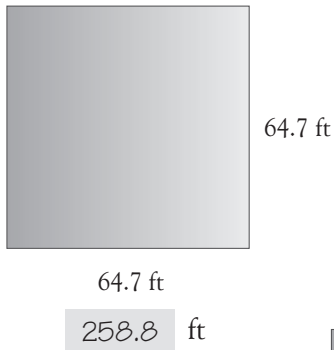
To find the perimeter of a rectangle or square, we add the two lengths and the two widths together.



$$\begin{array}{r}
 11 \\
 27.3 \text{ in.} \\
 27.3 \text{ in.} \\
 12.4 \text{ in.} \\
 + 12.4 \text{ in.} \\
 \hline
 79.4 \text{ in.}
 \end{array}$$

79.4 in.

Find the perimeter of these rectangles and squares.
You may need to do your work on a separate sheet.



On this page children must be reminded of calculating perimeter not area.
Remind children to add the four sides together.